

Smarties in the Summer


4th Grade



This packet belongs to:



Name: _____



MULTIPLICATION Mania

- | | | | | |
|-------------|-------------|-------------|-------------|-------------|
| 8x5= _____ | 2x6= _____ | 10x8= _____ | 4x5= _____ | 9x4= _____ |
| 7x3= _____ | 6x8= _____ | 2x8= _____ | 11x4= _____ | 5x7= _____ |
| 3x12= _____ | 4x1= _____ | 7x8= _____ | 5x9= _____ | 2x11= _____ |
| 1x1= _____ | 3x7= _____ | 6x6= _____ | 8x9= _____ | 4x8= _____ |
| 10x0= _____ | 9x2= _____ | 0x1= _____ | 4x4= _____ | 11x7= _____ |
| 3x5= _____ | 12x6= _____ | 8x3= _____ | 9x9= _____ | 2x3= _____ |
| 40x4= _____ | 20x9= _____ | 90x2= _____ | 30x6= _____ | 10x8= _____ |
| 70x8= _____ | 50x7= _____ | 40x5= _____ | 60x2= _____ | 80x3= _____ |

3 x4 ----	11 x0 ----	9 x1 ----	6 x7 ----	10 x10 ----	4 x7 ----	0 x9 ----	8 x8 ----
-----------------	------------------	-----------------	-----------------	-------------------	-----------------	-----------------	-----------------

5 x2 ----	6 x8 ----	3 x6 ----	0 x4 ----	7 x9 ----	4 x5 ----	10 x1 ----	7 x6 ----
-----------------	-----------------	-----------------	-----------------	-----------------	-----------------	------------------	-----------------


80 x1 ----	10 x0 ----	90 x8 ----	60 x7 ----	50 x6 ----	70 x3 ----
------------------	------------------	------------------	------------------	------------------	------------------

30 x8 ----	20 x4 ----	100 x6 ----	30 x4 ----	20 x5 ----	50 x1 ----
------------------	------------------	-------------------	------------------	------------------	------------------



AA
Name: _____

DIVING INTO DIVISION



$40 \div 4 = \underline{\quad}$

$14 \div 2 = \underline{\quad}$

$36 \div 4 = \underline{\quad}$

$6 \div 2 = \underline{\quad}$

$55 \div 11 = \underline{\quad}$

$42 \div 6 = \underline{\quad}$

$8 \div 4 = \underline{\quad}$

$60 \div 12 = \underline{\quad}$

$24 \div 6 = \underline{\quad}$

$36 \div 6 = \underline{\quad}$

$3 \div 3 = \underline{\quad}$

$16 \div 4 = \underline{\quad}$

$10 \div 2 = \underline{\quad}$

$14 \div 7 = \underline{\quad}$

$4 \div 2 = \underline{\quad}$

$45 \div 5 = \underline{\quad}$

$48 \div 6 = \underline{\quad}$

$70 \div 7 = \underline{\quad}$

$12 \div 2 = \underline{\quad}$

$120 \div 12 = \underline{\quad}$

$64 \div 8 = \underline{\quad}$

$28 \div 7 = \underline{\quad}$

$42 \div 7 = \underline{\quad}$

$50 \div 10 = \underline{\quad}$

$54 \div 6 = \underline{\quad}$

$28 \div 4 = \underline{\quad}$

$27 \div 9 = \underline{\quad}$

$33 \div 11 = \underline{\quad}$

$55 \div 5 = \underline{\quad}$

$48 \div 4 = \underline{\quad}$

$18 \div 6 = \underline{\quad}$

$24 \div 8 = \underline{\quad}$

$54 \div 9 = \underline{\quad}$

$24 \div 4 = \underline{\quad}$

$32 \div 4 = \underline{\quad}$

$12 \div 6 = \underline{\quad}$

$60 \div 5 = \underline{\quad}$

$12 \div 4 = \underline{\quad}$

$49 \div 7 = \underline{\quad}$

$12 \div 3 = \underline{\quad}$

$66 \div 6 = \underline{\quad}$

$56 \div 8 = \underline{\quad}$

$4 \div 4 = \underline{\quad}$

$36 \div 12 = \underline{\quad}$

$30 \div 5 = \underline{\quad}$

$100 \div 10 = \underline{\quad}$

$48 \div 8 = \underline{\quad}$

$5 \div 5 = \underline{\quad}$

$35 \div 7 = \underline{\quad}$

$16 \div 2 = \underline{\quad}$

$9 \div 3 = \underline{\quad}$

$20 \div 4 = \underline{\quad}$

$110 \div 11 = \underline{\quad}$

$56 \div 7 = \underline{\quad}$

$18 \div 3 = \underline{\quad}$

$99 \div 9 = \underline{\quad}$

$32 \div 8 = \underline{\quad}$



Name: _____



$3 \times 4 =$

$5 \times 5 =$

$12 \times 6 =$

$8 \times 1 =$

$8 \times 8 =$

$6 \times 2 =$

$12 \times 7 =$

$6 \times 2 =$

$7 \times 8 =$

$0 \times 3 =$

$9 \times 3 =$

$0 \times 11 =$

$6 \times 5 =$


$10 \times 11 =$

$5 \times 9 =$

$9 \times 9 =$

$6 \times 8 =$

$12 \times 3 =$



Name: _____



$64 \div 8 =$

$27 \div 3 =$

$120 \div 10 =$

$18 \div 3 =$

$30 \div 6 =$

$36 \div 6 =$

$60 \div 5 =$

$72 \div 8 =$

$42 \div 6 =$

$80 \div 8 =$

$14 \div 7 =$

$90 \div 10 =$

$24 \div 6 =$


$12 \div 1 =$

$6 \div 2 =$

$56 \div 8 =$

$40 \div 5 =$

$16 \div 4 =$





Name: _____

TWO-STEP WORD PROBLEMS

Solve each two-step word problem by showing your work and writing the answer on the line.



1 During the summer, I had to read for 1,000 minutes. In June, I read for 358 minutes. In July, I read for 423 minutes. How many minutes do I need to read in August to complete the 1,000 minutes?

2 Donny found 32 seashells at the beach and Joey found 24 seashells. They decided to baggie them up evenly and give to their 8 friends. How many seashells will each friend get?

3 On Friday, Margaret earned \$38 dollars at her lemonade stand. On Saturday, she earned \$53 dollars and on Sunday she earned \$29 dollars. Margaret spent \$13 on the ingredients for the weekend. How much of a profit did she make?

4 Mary Ellen earned \$12 for every lawn she mowed. In July, she mowed 9 lawns. She spent \$32 going to the movies, and at a few festivals. How much money does Mary Ellen have now?

AM

AM

Name: _____

ROUNDING TO THE NEAREST 10

238	97	503	552	27
746	6	972	368	33
502	183	77	435	72
668	13	89	353	999
843	129	64	501	757

AM

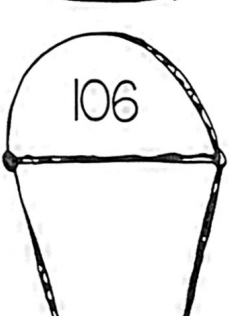

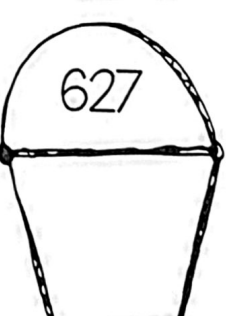

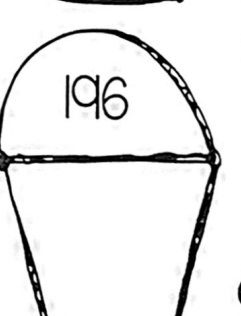
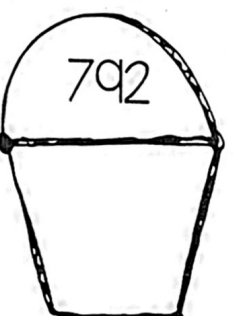

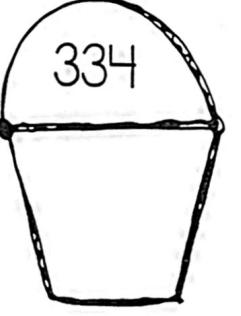
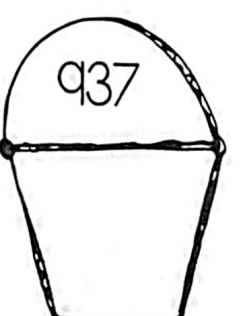
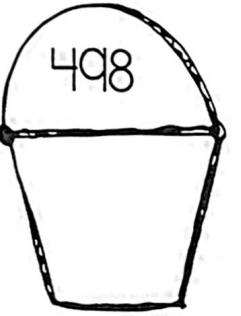
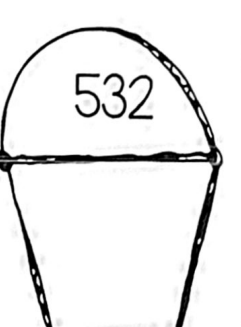
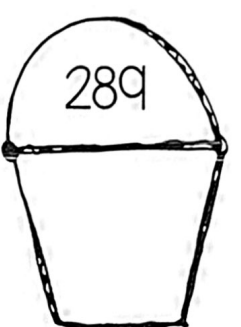
AM

AM

AM
Name: _____

AM

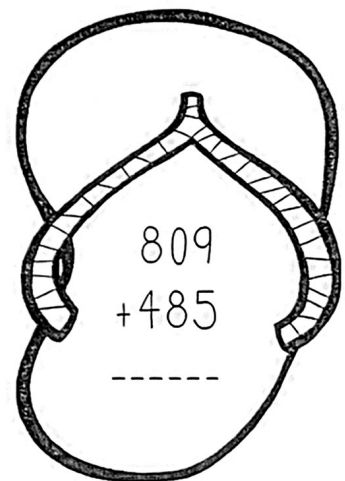
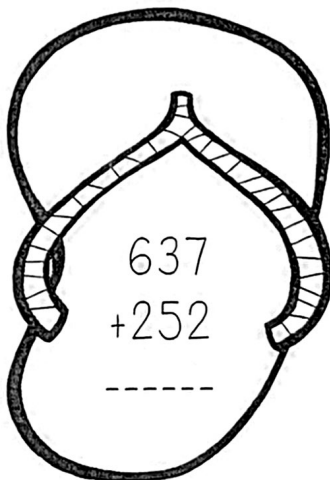
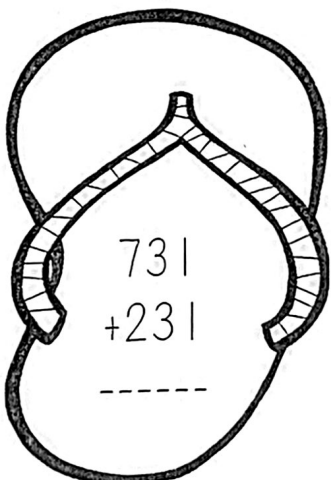
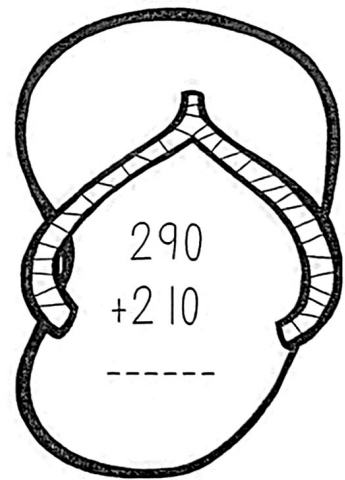
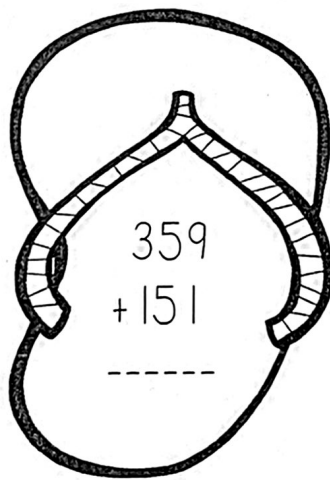
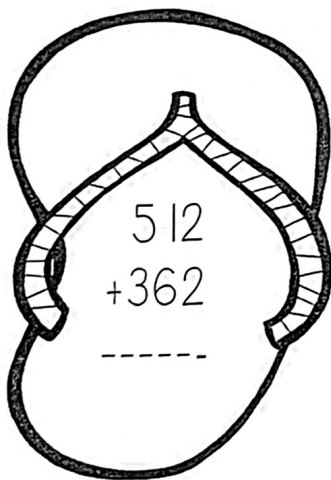
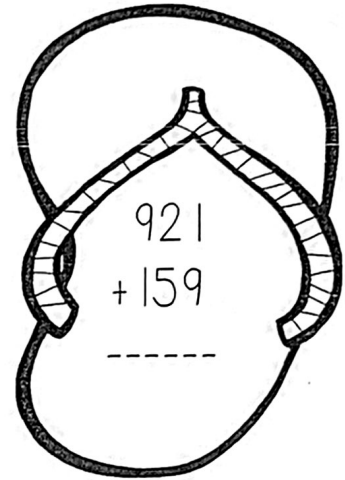
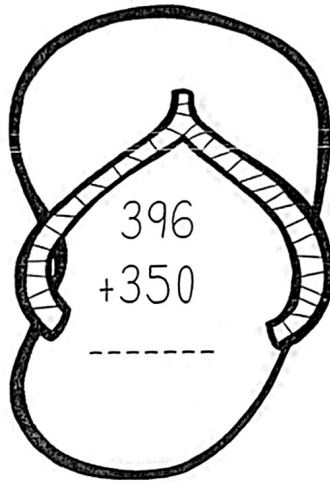
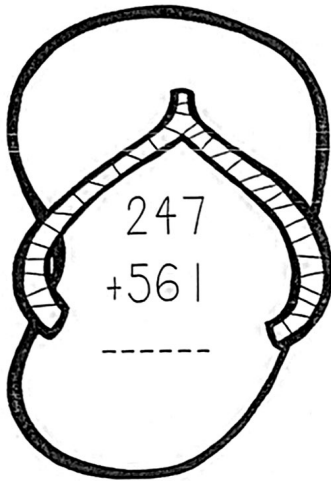
ROUNDING to THE Nearest 100



AM
Name: _____

AM

FUN IN THE SUN WITH ADDITION

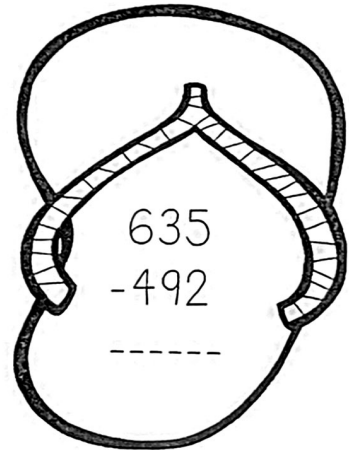
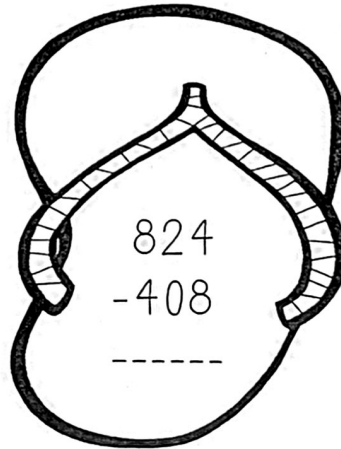
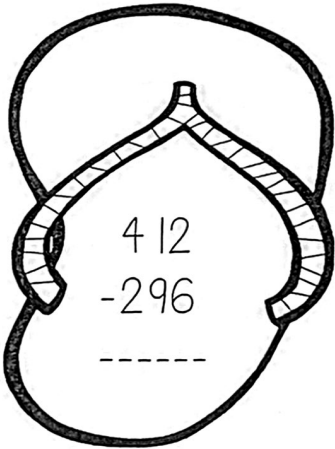
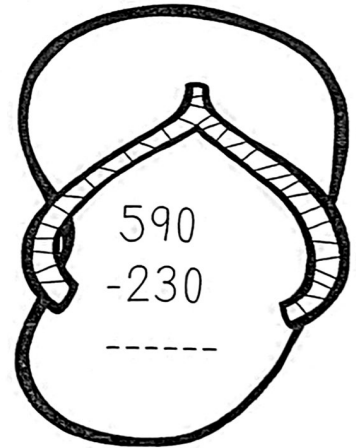
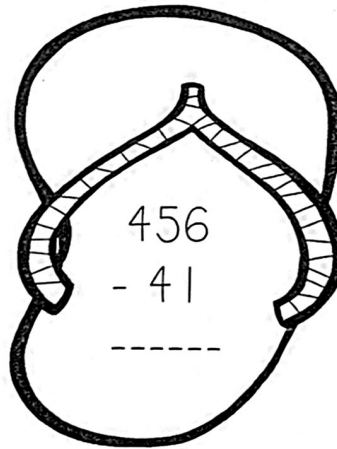
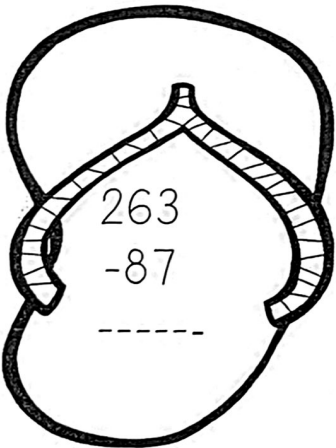
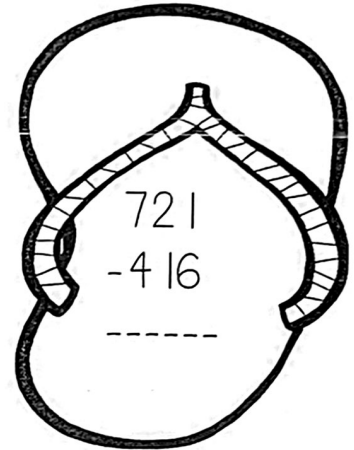
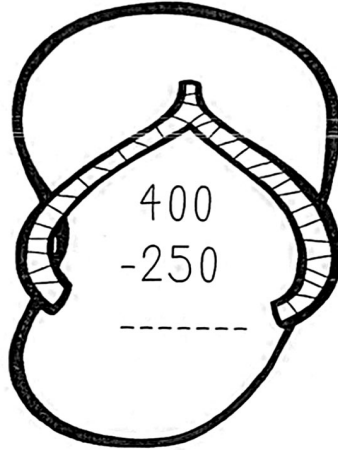
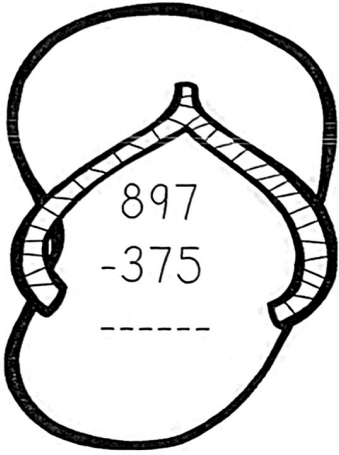


AM

AM

Name: _____

FUN iN THE SUN WITH SUBTRACTION



AM
Name: _____

AM

MULTI-DIGIT ADDITION and SUBTRACTION

1. 646
 $+ 381$

2. 204
 $+ 242$

3. 942
 $- 229$

4. 302
 $+ 351$

5. 520
 $- 461$

6. 434
 $- 36$

7. 237
 $+ 319$

8. 836
 $- 205$

9. 811
 $- 341$

10. 546
 $+ 531$

11. 597
 $+ 200$

12. 726
 $- 300$

13. 612
 $- 450$

14. 650
 $+ 408$

15. 431
 $+ 775$


16. $536 + 140 =$ _____

17. $741 - 382 =$ _____

18. $461 - 351 =$ _____

19. $123 + 528 =$ _____

20. $736 - 36 =$ _____



AM

AM

Name: _____




FRACTION FUN



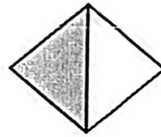
shaded _____

not shaded _____



shaded _____

not shaded _____



shaded _____

not shaded _____




shaded _____

not shaded _____



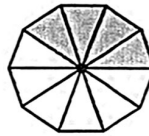
shaded _____

not shaded _____




shaded _____

not shaded _____



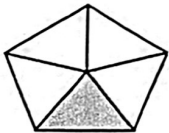
shaded _____

not shaded _____




shaded _____

not shaded _____




shaded _____

not shaded _____



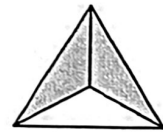
shaded _____

not shaded _____



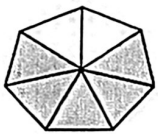
shaded _____

not shaded _____




shaded _____

not shaded _____



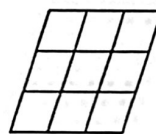
shaded _____

not shaded _____



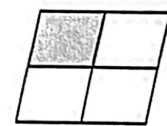
shaded _____

not shaded _____



shaded _____

not shaded _____



shaded _____

not shaded _____

AM

AM

Name: _____

COMPARING Fractions

Use <, >, =



Yrus



Yrus



Yrus




Yrus



Yrus



Yrus



Yrus



Yrus



Yrus



Yrus



Yrus



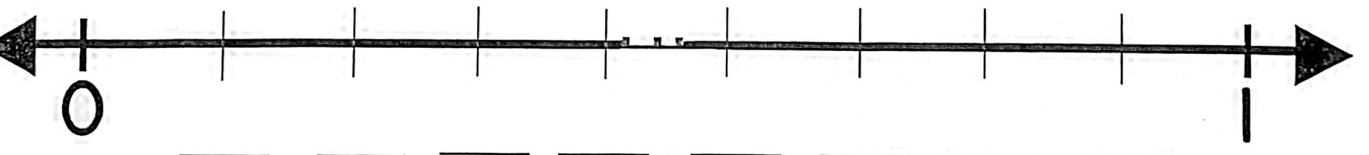
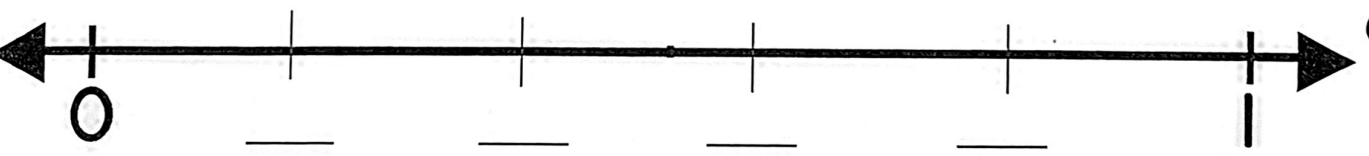
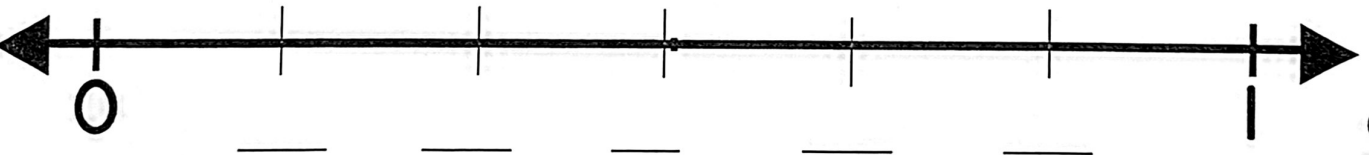
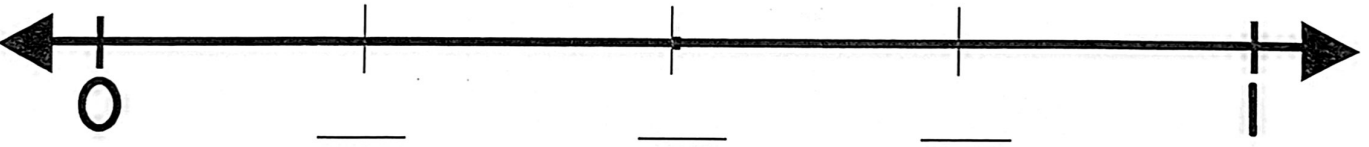
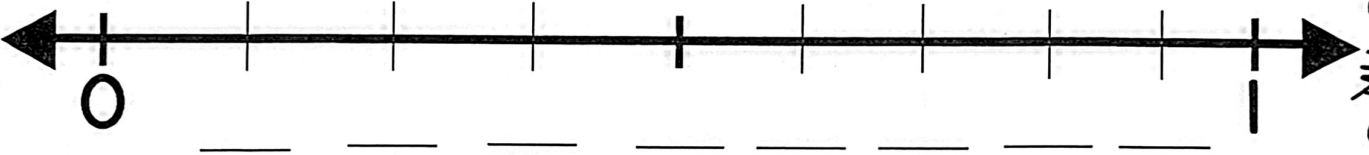

Yrus

AM

AM

Name: _____

FRACTIONS ON A NUMBER LINE



AM

AM

AM

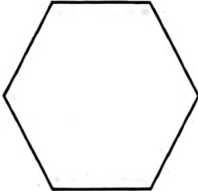



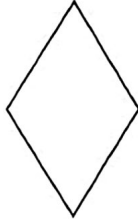



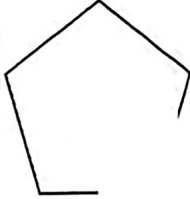

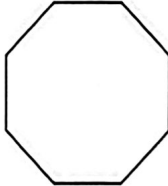

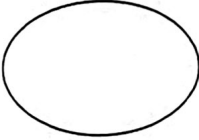



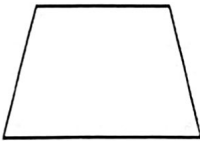

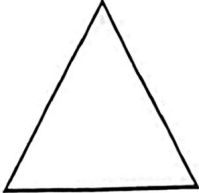

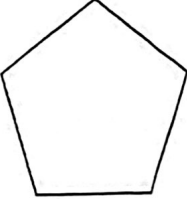



Name: _____



IS it A POLYGON?

Color in the top or bottom of the grill to correctly identify if the shape is a polygon or not. Don't forget - a polygon is a 2D shape with 3 or more straight sides and is a closed figure.



Name: _____

AREA and PERIMETER

